



ROUNDING TO THE NEAREST 100 SHEET 2

- Write down the value of each number marked by an arrow.
- Round the number to the nearest 100.

Remember: if the number is exactly half-way, it rounds up to the next 100.


Example



450 to the nearest 100 is 500

630 to the nearest 100 is 600

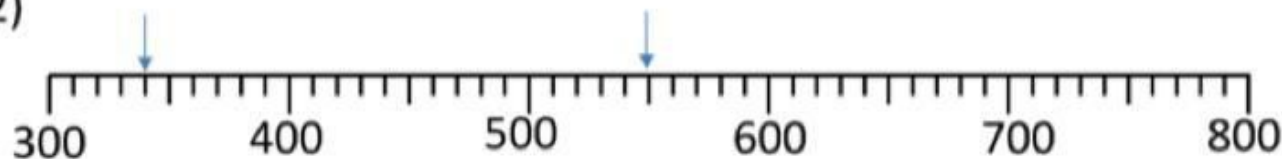
1)



370 to the nearest 100 is _____

_____ to the nearest 100 is _____

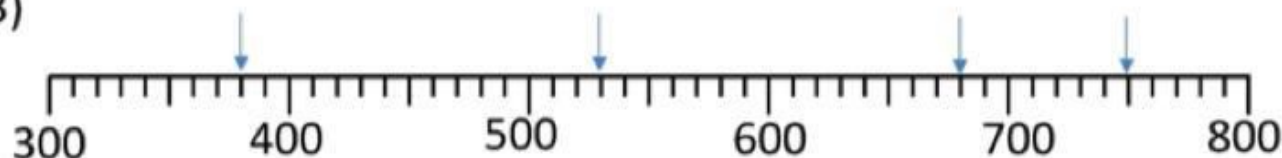
2)



_____ to the nearest 100 is _____

_____ to the nearest 100 is _____

3)



_____ to the nearest 100 is _____

_____ to the nearest 100 is _____

_____ to the nearest 100 is _____

_____ to the nearest 100 is _____

